





















## Aftrekken met de getallenlijn (0 tot 100)

Opdracht: Kleur de stappen en reken uit.

|   |              |
|---|--------------|
| <br>0 10 20 30 40 50 60 70 80 90 100   | $20 - 10 =$  |
| <br>0 10 20 30 40 50 60 70 80 90 100   | $50 - 30 =$  |
| <br>0 10 20 30 40 50 60 70 80 90 100   | $90 - 50 =$  |
| <br>0 10 20 30 40 50 60 70 80 90 100   | $70 - 60 =$  |
| <br>0 10 20 30 40 50 60 70 80 90 100   | $30 - 10 =$  |
| <br>0 10 20 30 40 50 60 70 80 90 100  | $80 - 40 =$  |
| <br>0 10 20 30 40 50 60 70 80 90 100 | $40 - 20 =$  |
| <br>0 10 20 30 40 50 60 70 80 90 100 | $100 - 30 =$ |
| <br>0 10 20 30 40 50 60 70 80 90 100 | $90 - 70 =$  |
| <br>0 10 20 30 40 50 60 70 80 90 100 | $100 - 20 =$ |

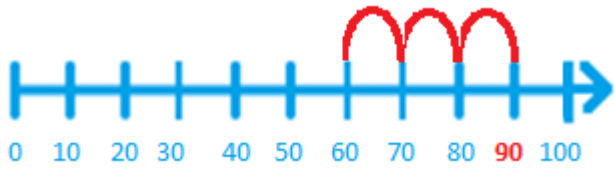
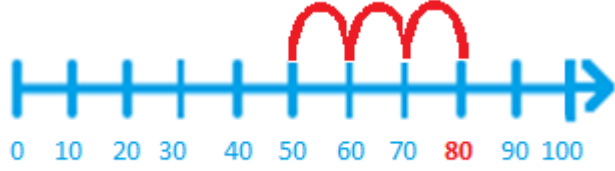
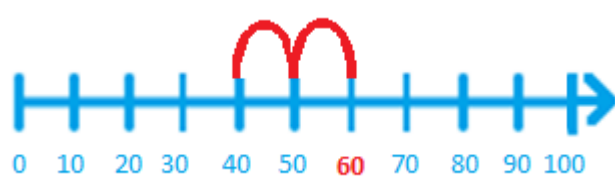
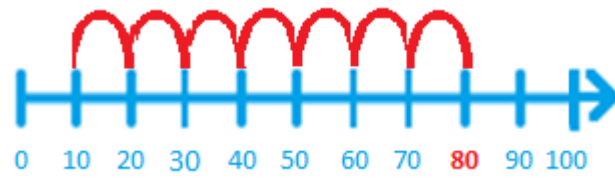
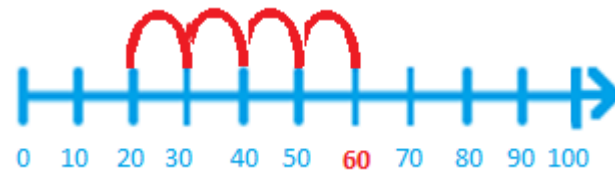
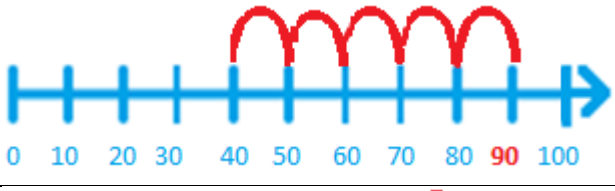
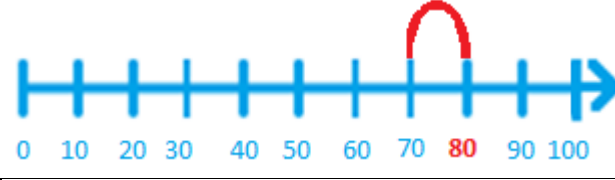
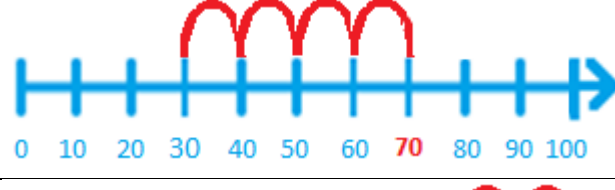

## Aftrekken met de getallenlijn (0 tot 100)

Opdracht: Kleur de stappen en reken uit.

|   |            |
|---|------------|
|  <p>10 11 12 13 14 15 16 17 18 19 20</p>   | $19 - 6 =$ |
|  <p>70 71 72 73 74 75 76 77 78 79 80</p>   | $76 - 5 =$ |
|  <p>40 41 42 43 44 45 46 47 48 49 50</p>   | $43 - 1 =$ |
|  <p>80 81 82 83 84 85 86 87 88 89 90</p>   | $89 - 5 =$ |
|  <p>90 91 92 93 94 95 96 97 98 99 100</p> | $97 - 3 =$ |
|  <p>50 51 52 53 54 55 56 57 58 59 60</p> | $56 - 4 =$ |
|  <p>60 61 62 63 64 65 66 67 68 69 70</p> | $64 - 1 =$ |
|  <p>20 21 22 23 24 25 26 27 28 29 30</p> | $25 - 2 =$ |
|  <p>40 41 42 43 44 45 46 47 48 49 50</p> | $49 - 7 =$ |
|  <p>30 31 32 33 34 35 36 37 38 39 40</p> | $37 - 7 =$ |

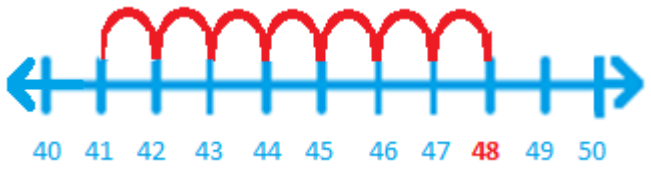
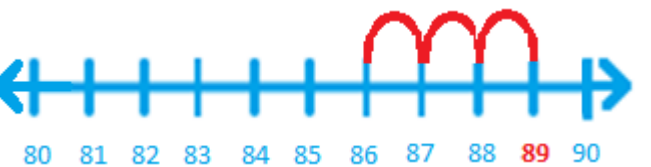
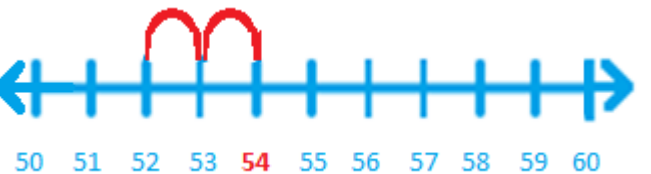
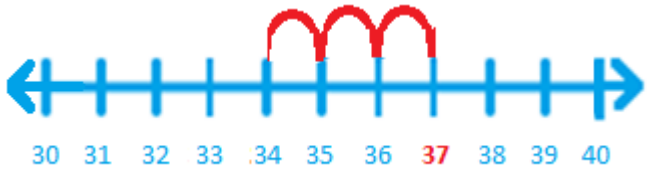
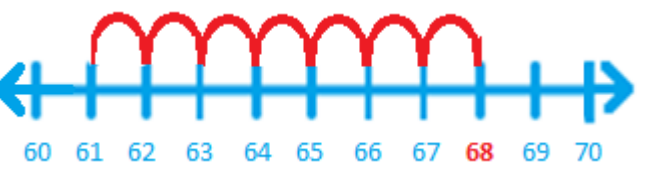
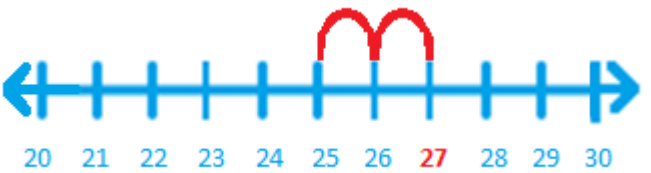
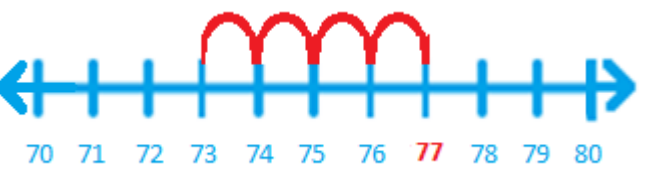


## Aftrekken met de getallenlijn (0 tot 100)

Opdracht: Vul in en reken uit.

|   |   |
|---|---|
|  <p>0 10 20 30 40 50 60 70 80 90 100</p>   | $\underline{\quad} - \underline{\quad} = \underline{\quad}$ |
|  <p>0 10 20 30 40 50 60 70 80 90 100</p>   | $\underline{\quad} - \underline{\quad} = \underline{\quad}$ |
|  <p>0 10 20 30 40 50 60 70 80 90 100</p>   | $\underline{\quad} - \underline{\quad} = \underline{\quad}$ |
|  <p>0 10 20 30 40 50 60 70 80 90 100</p>  | $\underline{\quad} - \underline{\quad} = \underline{\quad}$ |
|  <p>0 10 20 30 40 50 60 70 80 90 100</p> | $\underline{\quad} - \underline{\quad} = \underline{\quad}$ |
|  <p>0 10 20 30 40 50 60 70 80 90 100</p> | $\underline{\quad} - \underline{\quad} = \underline{\quad}$ |
|  <p>0 10 20 30 40 50 60 70 80 90 100</p> | $\underline{\quad} - \underline{\quad} = \underline{\quad}$ |
|  <p>0 10 20 30 40 50 60 70 80 90 100</p> | $\underline{\quad} - \underline{\quad} = \underline{\quad}$ |
|  <p>0 10 20 30 40 50 60 70 80 90 100</p> | $\underline{\quad} - \underline{\quad} = \underline{\quad}$ |











## Aftrekken met de getallenlijn (0 tot 100)

Opdracht: Vul in en reken uit.

|  |   |
|--|---|
|  <p>40 41 42 43 44 45 46 47 48 49 50</p>    | $\underline{\quad} - \underline{\quad} = \underline{\quad}$ |
|  <p>80 81 82 83 84 85 86 87 88 89 90</p>    | $\underline{\quad} - \underline{\quad} = \underline{\quad}$ |
|  <p>50 51 52 53 54 55 56 57 58 59 60</p>    | $\underline{\quad} - \underline{\quad} = \underline{\quad}$ |
|  <p>30 31 32 33 34 35 36 37 38 39 40</p>    | $\underline{\quad} - \underline{\quad} = \underline{\quad}$ |
|  <p>60 61 62 63 64 65 66 67 68 69 70</p>  | $\underline{\quad} - \underline{\quad} = \underline{\quad}$ |
|  <p>20 21 22 23 24 25 26 27 28 29 30</p>  | $\underline{\quad} - \underline{\quad} = \underline{\quad}$ |
|  <p>70 71 72 73 74 75 76 77 78 79 80</p>  | $\underline{\quad} - \underline{\quad} = \underline{\quad}$ |
|  <p>50 51 52 53 54 55 56 57 58 59 60</p>  | $\underline{\quad} - \underline{\quad} = \underline{\quad}$ |
|  <p>90 91 92 93 94 95 96 97 98 99 100</p> | $\underline{\quad} - \underline{\quad} = \underline{\quad}$ |

## Aftrekken met de getallenlijn (0 tot 100)

Opdracht: Kleur de stappen en reken uit (met tussenstap).

|   |                                     |
|---|-------------------------------------|
|  <p>30 31 32 33 34 35 36 37 38 39 40 41 42 43 44 45 46 47 48 49 50</p>   | $48 - 9 = 48 - 8 - 1 = 40 - 1$<br>= |
|  <p>60 61 62 63 64 65 66 67 68 69 70 71 72 73 74 75 76 77 78 79 80</p>   | $73 - 6 =$                          |
|  <p>50 51 52 53 54 55 56 57 58 59 60 61 62 63 64 65 66 67 68 69 70</p>   | $62 - 5 =$                          |
|  <p>70 71 72 73 74 75 76 77 78 79 80 81 82 83 84 85 86 87 88 89 90</p>   | $85 - 7 =$                          |
|  <p>80 81 82 83 84 85 86 87 88 89 90 91 92 93 94 95 96 97 98 99 100</p>  | $94 - 8 =$                          |
|  <p>30 31 32 33 34 35 36 37 38 39 40 41 42 43 44 45 46 47 48 49 50</p> | $41 - 3 =$                          |
|  <p>40 41 42 43 44 45 46 47 48 49 50 51 52 53 54 55 56 57 58 59 60</p> | $56 - 9 =$                          |
|  <p>70 71 72 73 74 75 76 77 78 79 80 81 82 83 84 85 86 87 88 89 90</p> | $82 - 4 =$                          |
|  <p>20 21 22 23 24 25 26 27 28 29 30 31 32 33 34 35 36 37 38 39 40</p> | $38 - 9 =$                          |
|  <p>10 11 12 13 14 15 16 17 18 19 20 21 22 23 24 25 26 27 28 29 30</p> | $24 - 5 =$                          |

## Aftrekken met de getallenlijn (0 tot 100)

Opdracht: Vul in en reken uit (met tussenstap).

|  |  |
|--|--|
| <p>10 11 12 13 14 15 16 17 18 19 20 21 22 23 24 25 26 27 28 29 30</p>  | $\underline{\quad} - \underline{\quad} = \underline{\quad} - \underline{\quad} -$<br>$\underline{\quad} = \underline{\quad} - \underline{\quad} = \underline{\quad}$ |
| <p>60 61 62 63 64 65 66 67 68 69 70 71 72 73 74 75 76 77 78 79 80</p>  | $\underline{\quad} - \underline{\quad} =$  |
| <p>40 41 42 43 44 45 46 47 48 49 50 51 52 53 54 55 56 57 58 59 60</p>  | $\underline{\quad} - \underline{\quad} =$  |
| <p>80 81 82 83 84 85 86 87 88 89 90 91 92 93 94 95 96 97 98 99 100</p> | $\underline{\quad} - \underline{\quad} =$  |
| <p>30 31 32 33 34 35 36 37 38 39 40 41 42 43 44 45 46 47 48 49 50</p>  | $\underline{\quad} - \underline{\quad} =$  |
| <p>50 51 52 53 54 55 56 57 58 59 60 61 62 63 64 65 66 67 68 69 70</p>  | $\underline{\quad} - \underline{\quad} =$  |
| <p>20 21 22 23 24 25 26 27 28 29 30 31 32 33 34 35 36 37 38 39 40</p>  | $\underline{\quad} - \underline{\quad} =$  |
| <p>70 71 72 73 74 75 76 77 78 79 80 81 82 83 84 85 86 87 88 89 90</p>  | $\underline{\quad} - \underline{\quad} =$  |
| <p>80 81 82 83 84 85 86 87 88 89 90 91 92 93 94 95 96 97 98 99 100</p> | $\underline{\quad} - \underline{\quad} =$  |
| <p>60 61 62 63 64 65 66 67 68 69 70 71 72 73 74 75 76 77 78 79 80</p>  | $\underline{\quad} - \underline{\quad} =$  |